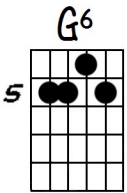


The V-System

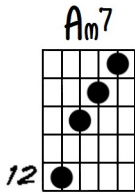
Quiz #1

Using Method #1, find the voicing group (V-1, V-2, etc.) for each of the following chords:

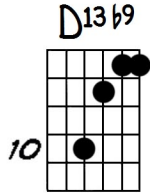
1)



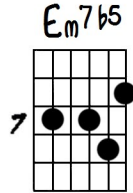
2)



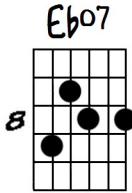
3)



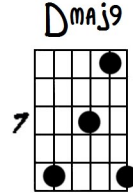
4)



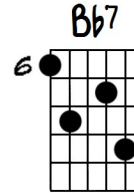
5)



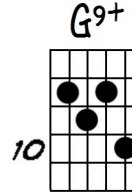
6)



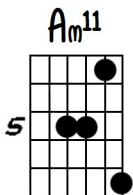
7)



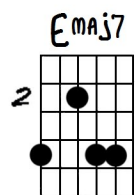
8)



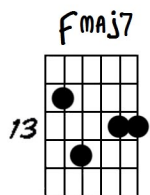
9)



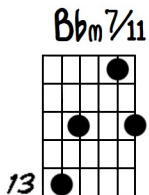
10)



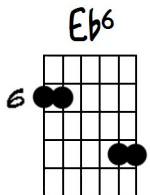
11)



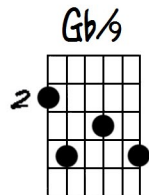
12)



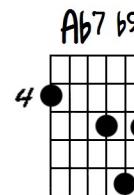
13)



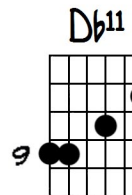
14)



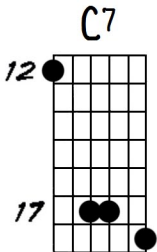
15)



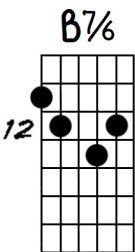
16)



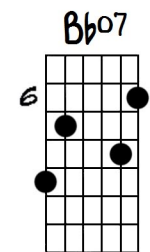
17)



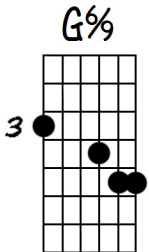
18)



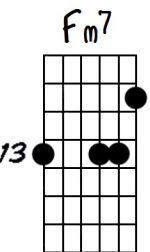
19)



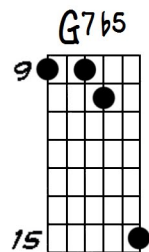
20)



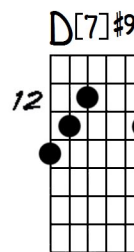
21)



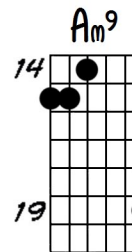
22)



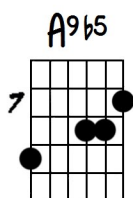
23)



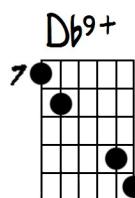
24)



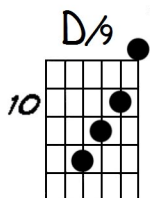
25)



26)



27)



28)

